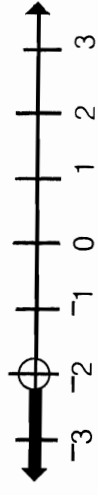


Why Did The Kangaroo See A Psychiatrist?



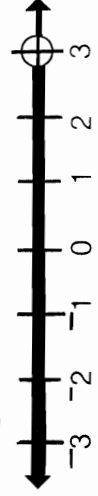
Find the graph of the solution set of any inequality below in the corresponding column of graphs. Notice the letter next to it. Write this letter in each box that contains the number of that exercise. Keep working and you will discover the answer to the title question.

① $x < 1$



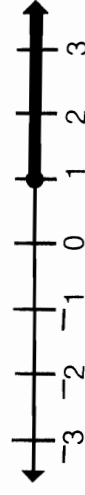
⑨

⑩ $x < -1$



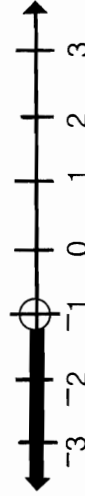
⑩

② $x \leq 1$



⑪

⑪ $-1 < x$



⑪

③ $x > 1$



⑫

⑫ $3 \geq x$



⑫

④ $x \geq 1$



⑬

⑬ $x < 3$



⑬

⑤ $x \neq 1$



⑭

⑭ $x \neq 0$



⑭

⑥ $x < -2$



⑮

⑮ $0 \leq x$



⑮

⑦ $x > -2$



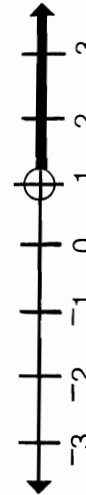
⑯

⑯ $0 \geq x$



⑯

⑧ $x \leq -2$



⑰

⑰ $0 < x$



⑰

⑨ $x \geq -2$



⑱

⑱ $0 > x$



⑱

6	16	15	13	11	1	16	7	16	1	16	1	15	6	4	6	16	15	5	9	12	16	16	8	2	11	3	9	13	18	10	17	14	4
---	----	----	----	----	---	----	---	----	---	----	---	----	---	---	---	----	----	---	---	----	----	----	---	---	----	---	---	----	----	----	----	----	---