

Name : _____

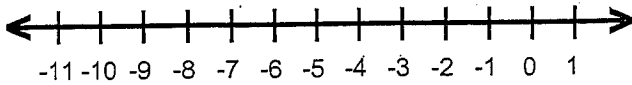
Score : _____

Teacher : _____

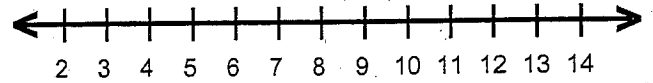
Date : _____

Solve and Graph the Inequalities

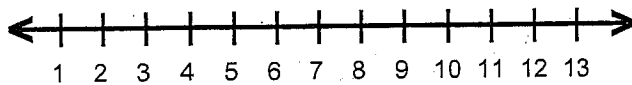
1) $44 > -6v + 2$



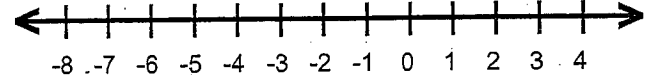
6) $2 - 3a < -10$



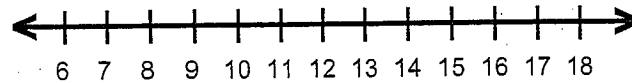
2) $-22 \leq -6f + 2$



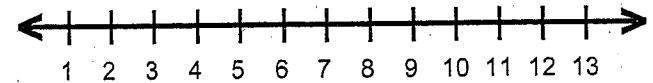
7) $5 \geq 6 + \frac{g}{3}$



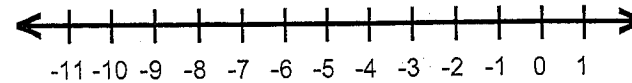
3) $3 + \frac{s}{4} \geq 5$



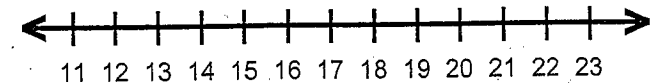
8) $62 \leq 2 + 6y$



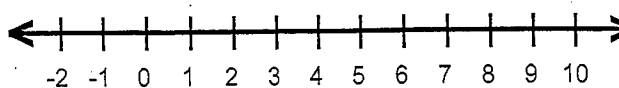
4) $-3 + \frac{d}{5} \geq -4$



9) $7 \leq 3 + \frac{r}{4}$



5) $6h + 4 > 28$



10) $-4n + 3 < -37$

