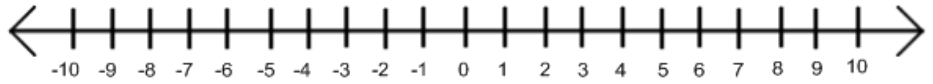


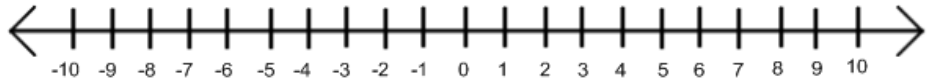
Name _____ Date _____ Hour _____

Graphing Inequalities Practice

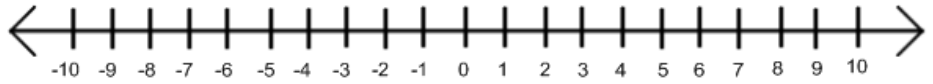
1. $3 > x$



2. $-5 \leq x$



3. $x < 0$



4. $10 \geq x$



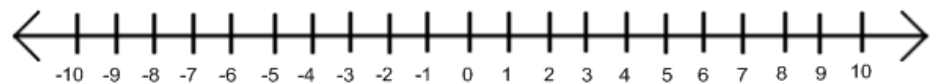
5. $x > 4$



6. $-4 \geq x$



7. $-3 \geq x$



8. $x < 7$



9. $7 < x$



10. $x > 7$

